

13.2 Calculus on 3D Curves

Example: Consider

$$x = t, y = 2 - t^2$$

which can also be written as

$$\mathbf{r}(t) = \langle t, 2 - t^2 \rangle$$

1. Find $\frac{dx}{dt}$ and $\frac{dy}{dt}$.

What do these represent?

2. When $t = 1$, what is the location and what is the slope of the tangent line?
3. Find a vector in the direction of the tangent line at $t = 1$.

$$\boxed{1} \quad \frac{dx}{dt} = 1 = \text{horizontal velocity}$$

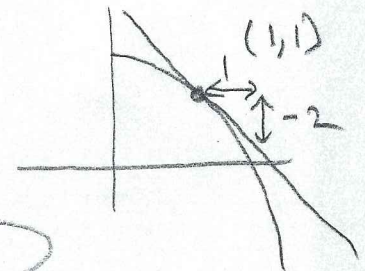
$$\frac{dy}{dt} = -2t = \text{vertical velocity}$$

$$\boxed{2} \quad t=1 \Rightarrow x=1, y=1$$

$$x'(1)=1, y'(1)=-2$$

RECALL

$$\frac{dy}{dx} = \frac{dy/dt}{dx/dt} = \frac{-2}{1}$$



$$y = -2(x - 1) + 1$$

MATH 124

$$\boxed{3} \quad \text{MATH 126}$$

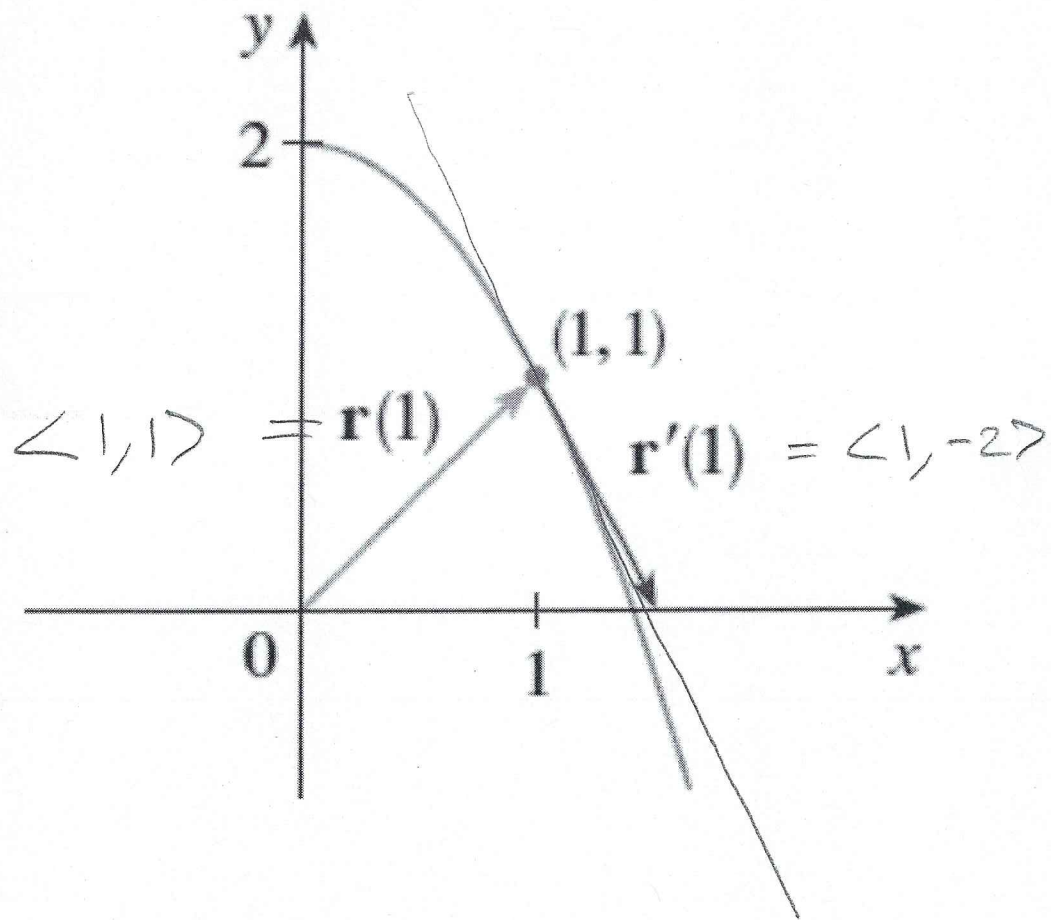
$$\mathbf{r}_0 = \langle 1, 1 \rangle$$

$$\mathbf{v} = \langle 1, -2 \rangle = \text{TANGENT VECTOR}$$

$$\boxed{\begin{array}{l} x = 1 + 1t \\ y = 1 + -2t \end{array}}$$

Visual of last example:

$$\mathbf{r}(t) = \langle t, 2 - t^2 \rangle$$



$$x = 1 + t$$

$$y = 1 - 2t$$

TANGENT LINE

In general: Vector Calculus

For $\vec{r}(t) = \langle x(t), y(t), z(t) \rangle$, we define

$$\vec{r}'(t) = \lim_{h \rightarrow 0} \left\langle \frac{x(t+h) - x(t)}{h}, \frac{y(t+h) - y(t)}{h}, \frac{z(t+h) - z(t)}{h} \right\rangle$$

which is the same as

$$\vec{r}'(t) = \langle x'(t), y'(t), z'(t) \rangle$$

And

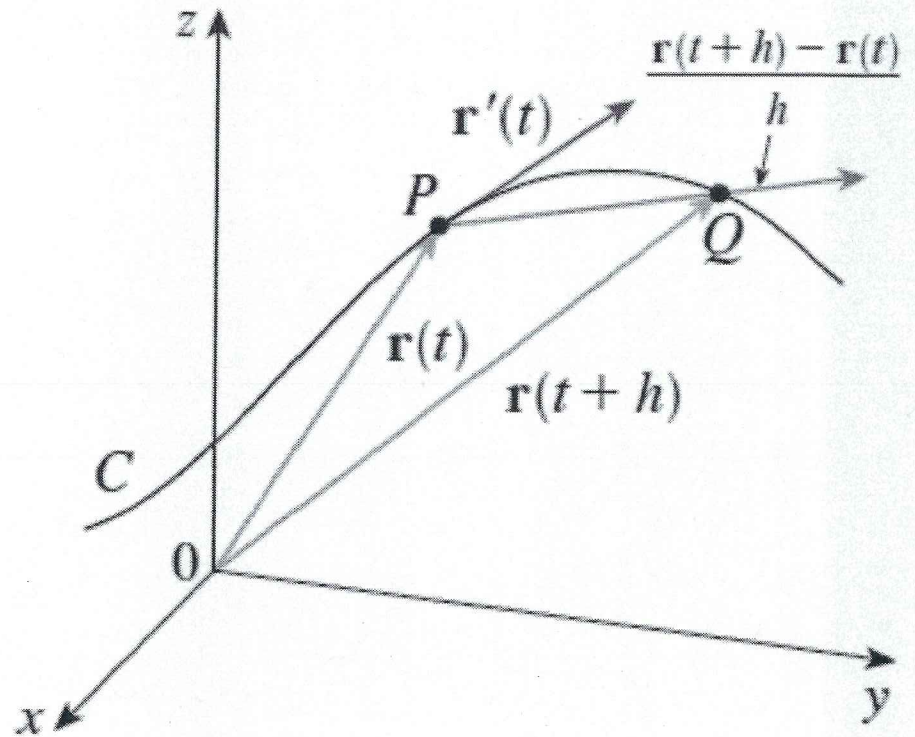
$$\vec{r}'(t) = \langle x'(t), y'(t), z'(t) \rangle$$

is a tangent vector to the curve.

Do calculus **component-wise!**

NOTE: ① $\vec{PQ} = \vec{r}(t+h) - \vec{r}(t)$

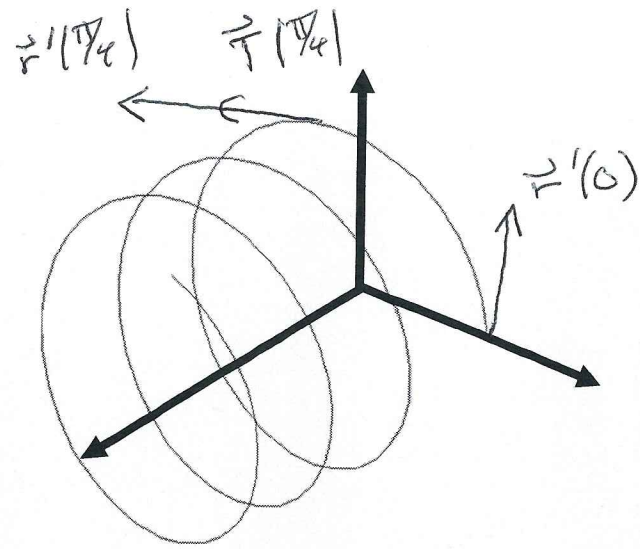
NOTE: ② DIVIDING BY h , RESCALES
BUT KEEPS DIRECTION THE SAME.



Example

$$\vec{r}(t) = \langle t, \cos(2t), \sin(2t) \rangle.$$

1. Find $\vec{r}'(t)$.
2. Find $\vec{r}(0)$ and $\vec{r}(\pi/4)$.
3. Find $\vec{r}'(0)$ and $\vec{r}'(\pi/4)$.
4. Find the unit tangent vector $\vec{T}(t)$ at $t = \pi/4$.



$$\boxed{1} \quad \vec{r}'(t) = \langle 1, -2\sin(2t), 2\cos(2t) \rangle$$

$$\boxed{2} \quad \vec{r}(0) = \langle 0, 1, 0 \rangle \quad \vec{r}(\pi/4) = \langle \pi/4, 0, 1 \rangle$$

$$\boxed{3} \quad \vec{r}'(0) = \langle 1, 0, 2 \rangle \quad \vec{r}'(\pi/4) = \langle 1, -2, 0 \rangle$$

PARALLEL TO XZ-PLANE PARALLEL TO XY-PLANE

$$\boxed{4} \quad \vec{T}(\pi/4) = \frac{1}{|\vec{r}'(\pi/4)|} \vec{r}'(\pi/4) = \frac{1}{\sqrt{1+4+0}} \langle 1, -2, 0 \rangle = \left\langle \frac{1}{\sqrt{5}}, \frac{-2}{\sqrt{5}}, 0 \right\rangle$$

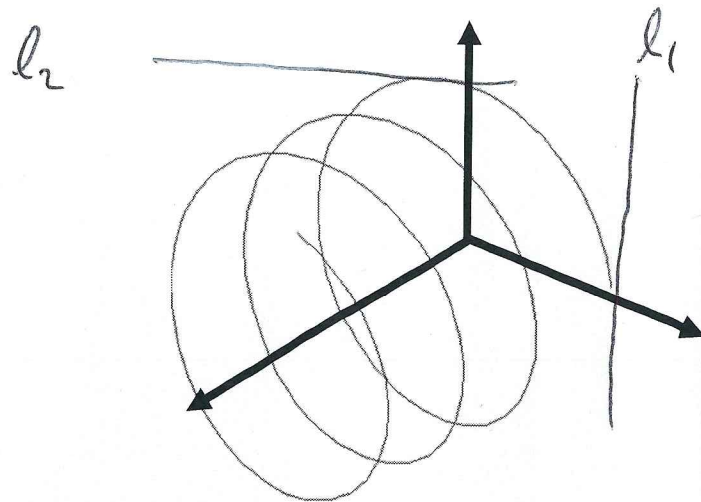
Example Continued

$$\vec{r}(t) = \langle t, \cos(2t), \sin(2t) \rangle.$$

5. Find parametric equations for the tangent line at $t = 0$.
6. Find parametric equation for the tangent line at $t = \pi/4$.

$$\begin{array}{l} \boxed{5} \\ l_1 \end{array} \quad \begin{array}{l} x = 0 + t \\ y = 1 + 0t \\ z = 0 + 2t \end{array}$$

$$\begin{array}{l} \boxed{6} \\ l_2 \end{array} \quad \begin{array}{l} x = \frac{\pi}{4} + t \\ y = 0 - 2t \\ z = 1 + 0t \end{array}$$



Example: Antiderivatives

First some review

Find the antiderivative of

$$f'(t) = \sin(t) + e^{2t} - \frac{t^3}{5}$$

with $f(0) = 7$.

$$f(t) = \int \sin(t) + e^{2t} - \frac{1}{5}t^3 dt$$

$$f(t) = -\cos(t) + \frac{1}{2}e^{2t} - \frac{1}{20}t^4 + C$$

$$f(0) = 7 \Rightarrow -1 + \frac{1}{2} - 0 + C = 7$$

$$\Rightarrow C = 7 + \frac{1}{2} = \frac{15}{2}$$

$$f(t) = -\cos(t) + \frac{1}{2}e^{2t} - \frac{1}{20}t^4 + \frac{15}{2}$$

Check!!!

Now find the antiderivative of

$$\vec{r}'(t) = \langle e^{3t}, t^4, \sin(t) - t \rangle.$$

with $\vec{r}(0) = \mathbf{i} + 3\mathbf{j} - 2\mathbf{k}$.

$$\vec{r}(t) = \int \vec{r}'(t) dt$$

$$= \left\langle \frac{1}{3}e^{3t} + C_1, \frac{1}{5}t^5 + C_2, -\cos(t) - \frac{1}{2}t^2 + C_3 \right\rangle$$

$$\vec{r}(0) = \langle 1, 3, -2 \rangle \Rightarrow \frac{1}{3} + C_1 = 1 \Rightarrow C_1 = \frac{2}{3}$$

$$0 + C_2 = 3 \Rightarrow C_2 = 3$$

$$-1 + C_3 = -2 \Rightarrow C_3 = -1$$

$$\vec{r}(t) = \left\langle \frac{1}{3}e^{3t} + \frac{2}{3}, \frac{1}{5}t^5 + 3, -\cos(t) - \frac{1}{2}t^2 - 1 \right\rangle$$